

## Food Chains

### What did dinosaurs eat?

#### Student Introduction

- ✓ Scientists use the fossilised teeth to work out what food the different dinosaurs ate.
- ✓ Scientists put this information together in a food chain.

#### Background

On many of the Isle of Wight beaches fossils can be found. Fossilised teeth are most interesting as we can work out which dinosaur they came from and what food they ate.

The team at Dinosaur Expeditions have created a large display of dinosaur teeth, fossils, models and pictures. You can use the information in this display to help you complete this worksheet.




## Teaching resources by Education Destination Ltd.


Curriculum relevant materials supporting school trips to the Isle of Wight

Book today with Education Destination and get full access to this and hundreds more quality resources

The arrow → means is eaten by  
[www.edudest.uk](http://www.edudest.uk)



Carrot



Rabbit



Fox

- ▶ Animals cannot make their own food, but plants can.
- ▶ We call plants **producers**.
- ▶ Animals that eat plants are called **herbivores**.
- ▶ Animals that eat other animals are called **carnivores**.

Add these key words **producer, herbivore, carnivore** to the food chain above.

#### Other key words:

**predator**

**prey**

A **predator** hunts other animals for food. Animals that are hunted for food are called **prey**.

✓ In this food chain the \_\_\_\_\_ is the predator.

✓ In this food chain the \_\_\_\_\_ is the prey.

Student name: \_\_\_\_\_


STEP  
2



114051

## Dinosaur Food Chains

This is a food chain for a dinosaur living near a river:



**Tiny Microbes**  
(make their own food)



**Shell Fish (Mussels)**



**Oviraptor**

## Teaching resources by Education Destination Ltd.

Curriculum relevant materials supporting school trips to the Isle of Wight  
Book today with Education Destination and get full access to this and hundreds more quality resources

[www.edudest.uk](http://www.edudest.uk)

Make a food chain from these pictures - the pictures are in the wrong order.



**Triceratops**



**Tyrannosaurus Rex**



**Cycad**

Write the names in the correct order to show the food chain:







### Tyrannosaurus Rex and other carnivore dinosaurs ate animals.

Which of these teeth belong to a carnivore?



**STEP**  
3

Use the display to make a food chain!

## Teaching resources by Education Destination Ltd.

Curriculum relevant materials supporting school trips to the Isle of Wight

Book today with Education Destination and get full access to this and hundreds more quality resources

[www.edudest.uk](http://www.edudest.uk)



**Plants**



**Brachiosaurus**



**Neovenator**

► Draw another food chain that you can see in the display:

